

# Constable Executive Male and Female in Delhi Police Examination 2023

Roll Number	
Candidate Name	
Venue Name	Jaipur Engineering College
Exam Date	14/11/2023
Exam Time	12:00 PM - 1:30 PM
Subject	Constable Executive Male and Female in Delhi Police Examination 2023

Section : **General Knowledge**

**Q.1 Who was defeated by Chandragupta Maurya in order to found the Maurya dynasty?**

- Ans  1. Dhana Nanda.  
 2. Bimbisara  
 3. Mahapadma Nanda  
 4. Ajatshatru

Question ID : **264330119709**  
Option 1 ID : **264330469114**  
Option 2 ID : **264330469112**  
Option 3 ID : **264330469111**  
Option 4 ID : **264330469113**  
Status : **Answered**  
Chosen Option : **2**

**Q.2 Any dispute between the Government of India and one or more States or between the Government of India and any State or States comes under \_\_\_\_\_ jurisdiction of the Supreme Court of India.**

- Ans  1. Advisory  
 2. Appellate  
 3. Exclusive Original  
 4. Writ

Question ID : **264330130479**  
Option 1 ID : **264330511029**  
Option 2 ID : **264330511028**  
Option 3 ID : **264330511027**  
Option 4 ID : **264330511030**  
Status : **Answered**  
Chosen Option : **1**

**Q.3 Kajli Teej is the cultural festival of which Indian state?**

- Ans  1. Rajasthan  
 2. Goa  
 3. West Bengal  
 4. Maharashtra

Question ID : **264330109608**  
Option 1 ID : **264330430711**  
Option 2 ID : **264330430710**  
Option 3 ID : **264330430712**  
Option 4 ID : **264330430709**  
Status : **Not Answered**  
Chosen Option : **--**

Q.4 In whose presence does the Governor take oath or make affirmation in case of the absence of the Chief Justice of the High Court?

- Ans
- 1. Nominated judge by President
  - 2. Secretary of State Legislature
  - 3. Senior-most judge of High Court available
  - 4. Speaker of State legislature

Question ID : 26433069888  
Option 1 ID : 264330274058  
Option 2 ID : 264330274056  
Option 3 ID : 264330274059  
Option 4 ID : 264330274057  
Status : Answered  
Chosen Option : 4

Q.5 What is the slogan of the Pradhan Mantri Jan Dhan Yojana?

- Ans
- 1. MeraAdhikar, MeraKhaata
  - 2. MeraKhaata, MeraAdhikar
  - 3. Mera Paisa, Mere Bank Me
  - 4. Mera Khaata, Bhagya Vidhaata

Question ID : 26433059311  
Option 1 ID : 264330232122  
Option 2 ID : 264330232121  
Option 3 ID : 264330232123  
Option 4 ID : 264330232120  
Status : Answered  
Chosen Option : 2

Q.6 According to Census 2011 of India, which religion recorded highest literacy rate from following?

- Ans
- 1. Hindu
  - 2. Muslim
  - 3. Jain
  - 4. Sikh

Question ID : 264330138114  
Option 1 ID : 264330541064  
Option 2 ID : 264330541065  
Option 3 ID : 264330541063  
Option 4 ID : 264330541066  
Status : Not Answered  
Chosen Option : --

Q.7 In 1932, the Poona Pact was signed between Mahatma Gandhi and \_\_\_\_\_.

- Ans
- 1. C. Natesa Mudaliar
  - 2. Taravath Madhavan Nair
  - 3. Ramaswami Naicker-Periyar
  - 4. Dr. Babasaheb Ambedkar

Question ID : 264330114860  
Option 1 ID : 264330451525  
Option 2 ID : 264330451526  
Option 3 ID : 264330451528  
Option 4 ID : 264330451527  
Status : Answered  
Chosen Option : 4

Q.8 In which year did India adopt a dual exchange rate for the interim period?

- Ans
- 1. 1994
  - 2. 1990
  - 3. 1996
  - 4. 1992

Question ID : 264330109396  
Option 1 ID : 264330429863  
Option 2 ID : 264330429861  
Option 3 ID : 264330429864  
Option 4 ID : 264330429862  
Status : Not Answered  
Chosen Option : --

Q.9 The Hindi novel 'Indrajal' is written by:

- Ans
- 1. Ramdhari Singh Dinkar
  - 2. Harivansh Rai Bachchan
  - 3. Jaishankar Prasad
  - 4. Namvar Singh

Question ID : 26433072947  
Option 1 ID : 264330285980  
Option 2 ID : 264330285982  
Option 3 ID : 264330285983  
Option 4 ID : 264330285981  
Status : Not Answered  
Chosen Option : --

Q.10 Rafflesia arnoldii is famous because:

- Ans
- 1. it has the thickest trunk
  - 2. it has the largest leaves in the plant kingdom
  - 3. it is the tallest plant in the plant kingdom
  - 4. it has the largest flower in the plant kingdom

Question ID : 264330120904  
Option 1 ID : 264330473833  
Option 2 ID : 264330473834  
Option 3 ID : 264330473831  
Option 4 ID : 264330473832  
Status : Not Answered  
Chosen Option : --

Q.11 National Investment Fund in India is a corpus fund that mobilises its financial receipts from \_\_\_\_\_.

- Ans
- 1. proceeds of profits of Central Public Sector Undertakings
  - 2. proceeds from disinvestment of Central Public Sector Undertakings
  - 3. savings of General Provident Fund
  - 4. contributory pension scheme

Question ID : 264330111786  
Option 1 ID : 264330439232  
Option 2 ID : 264330439231  
Option 3 ID : 264330439230  
Option 4 ID : 264330439229  
Status : Not Answered  
Chosen Option : --

Q.12 When did India host the Asian Games for the first time?

Ans  1. 1951

2. 1954

3. 1962

4. 1990

Question ID : 264330119257

Option 1 ID : 264330467317

Option 2 ID : 264330467315

Option 3 ID : 264330467316

Option 4 ID : 264330467318

Status : Answered

Chosen Option : 1

Q.13 Destruction, weathering, dissolving, rainfall, and lithification are the major geological processes that contribute to the formation of which of the following rocks?

Ans  1. Igneous rocks

2. Sedimentary rocks

3. Sub-metamorphic rocks

4. Metamorphic rocks

Question ID : 264330131816

Option 1 ID : 264330516363

Option 2 ID : 264330516364

Option 3 ID : 264330516366

Option 4 ID : 264330516365

Status : Not Answered

Chosen Option : --

Q.14 Which of the following statements are correct regarding festivals followed in Christianity?

A. Easter is the day celebrated for the 'Resurrection of Jesus Christ'.

B. According to the Bible, 'Three days after Jesus was crucified, he was resurrected'.

C. Good Friday is to commemorate the day of crucifixion of Jesus Christ.

Ans  1. A and C only

2. B and C only

3. A, B and C

4. A and B only

Question ID : 264330119656

Option 1 ID : 264330468901

Option 2 ID : 264330468900

Option 3 ID : 264330468902

Option 4 ID : 264330468899

Status : Answered

Chosen Option : 1

Q.15 Which of the following is NOT a key player in the microfinance sector?

Ans  1. IDBI

2. Regional rural banks

3. Small finance banks

4. Commercial banks

Question ID : 264330119669

Option 1 ID : 264330468952

Option 2 ID : 264330468954

Option 3 ID : 264330468953

Option 4 ID : 264330468951

Status : Not Answered

Chosen Option : --

Q.16 The Begumpuri mosque was built during the reign of Sultan \_\_\_\_\_.

Ans  1. Ghiyasuddin Balban

2. Qutbuddin Aybak

3. Muhammad Bin Tughluq

4. Jalaluddin Khalji

Question ID : 264330183098

Option 1 ID : 264330718127

Option 2 ID : 264330718126

Option 3 ID : 264330718125

Option 4 ID : 264330718124

Status : Not Answered

Chosen Option : --

Q.17 R Muthukannammal was conferred the Padma Shri award in 2022. Which of the following is her contribution?

Ans  1. Working with Orissa's poor and backward communities

2. Specializing in the study of Indian society

3. Being a custodian of the early dance form of Bharatnatyam

4. Playing a key role in powering India's Blue Revolution

Question ID : 26433091036

Option 1 ID : 264330357555

Option 2 ID : 264330357554

Option 3 ID : 264330357556

Option 4 ID : 264330357553

Status : Answered

Chosen Option : 4

Q.18 Which of the following ministries collaborated with NCERT on a joint mission for the NISHTHA capacity-building programme for Eklavya school teachers and principals?

Ans  1. Ministry of Skill Development and Entrepreneurship

2. Ministry of Minority Affairs

3. Ministry of Education

4. Ministry of Tribal Affairs

Question ID : 264330111589

Option 1 ID : 264330438441

Option 2 ID : 264330438443

Option 3 ID : 264330438442

Option 4 ID : 264330438444

Status : Answered

Chosen Option : 3

Q.19 What is the molecular mass of an ozone molecule?

- Ans  1. 32  
 2. 48  
 3. 16  
 4. 18

Question ID : 264330177018  
Option 1 ID : 264330694269  
Option 2 ID : 264330694268  
Option 3 ID : 264330694267  
Option 4 ID : 264330694270  
Status : Not Answered  
Chosen Option : --

Q.20 The famous south Indian epic 'Silappadikaram' was originally written in \_\_\_\_\_ language.

- Ans  1. Sanskrit  
 2. Tamil  
 3. Malayalam  
 4. Telugu

Question ID : 264330119476  
Option 1 ID : 264330468189  
Option 2 ID : 264330468190  
Option 3 ID : 264330468188  
Option 4 ID : 264330468187  
Status : Answered  
Chosen Option : 2

Q.21 Jhali is the folk dance of which Indian state?

- Ans  1. Uttar Pradesh  
 2. Madhya Pradesh  
 3. Bihar  
 4. Himachal Pradesh

Question ID : 264330141326  
Option 1 ID : 264330553639  
Option 2 ID : 264330553640  
Option 3 ID : 264330553642  
Option 4 ID : 264330553641  
Status : Not Answered  
Chosen Option : --

Q.22 Musician Bhajan Sopori was a Santoor maestro from the \_\_\_\_\_ Gharana.

- Ans  1. Maihar  
 2. Benaras  
 3. Punjab  
 4. Sufiana

Question ID : 264330112683  
Option 1 ID : 264330442819  
Option 2 ID : 264330442820  
Option 3 ID : 264330442818  
Option 4 ID : 264330442817  
Status : Answered  
Chosen Option : 2

Q.23 Which of the following is NOT a feature of India's parliamentary government?

- Ans  1. Dissolution of the Rajya Sabha  
 2. Presence of nominal and real executives  
 3. Membership of the ministers in the legislature  
 4. Majority party rule

Question ID : 264330114134  
Option 1 ID : 264330448624  
Option 2 ID : 264330448621  
Option 3 ID : 264330448623  
Option 4 ID : 264330448622  
Status : Answered  
Chosen Option : 2

Q.24 The Harappan city of Dholavira was divided into how many parts?

- Ans  1. 2  
 2. 4  
 3. 3  
 4. 5

Question ID : 264330109641  
Option 1 ID : 264330430841  
Option 2 ID : 264330430843  
Option 3 ID : 264330430842  
Option 4 ID : 264330430844  
Status : Answered  
Chosen Option : 1

Q.25 Identify the crop which is grown in Rabi season in North India from the following.

- Ans  1. Rice  
 2. Cotton  
 3. Gram  
 4. Bajra

Question ID : 264330181455  
Option 1 ID : 264330711743  
Option 2 ID : 264330711744  
Option 3 ID : 264330711746  
Option 4 ID : 264330711745  
Status : Not Answered  
Chosen Option : --

Q.26 'Freedom is my birth right and I shall have it'. Who among the following said this?

- Ans  1. Lala Lajpat Rai  
 2. Bal Gangadhar Tilak  
 3. Aurobindo Ghosh  
 4. Bipin Chandra pal

Question ID : 264330114872  
Option 1 ID : 264330451575  
Option 2 ID : 264330451574  
Option 3 ID : 264330451576  
Option 4 ID : 264330451573  
Status : Answered  
Chosen Option : 3

Q.27 The first battle of Panipat was fought between Babur and \_\_\_\_\_ .

- Ans  1. Ibrahim Lodhi  
 2. Maharana Pratap  
 3. Muhammad bin Tughlaq  
 4. Sikandar Lodhi

Question ID : 264330118984  
Option 1 ID : 264330466593  
Option 2 ID : 264330466594  
Option 3 ID : 264330466592  
Option 4 ID : 264330466591  
Status : Answered  
Chosen Option : 1

Q.28 The period between two FIFA Football World Cups is \_\_\_\_\_ .

- Ans  1. 3 years  
 2. 5 years  
 3. 4 years  
 4. 6 years

Question ID : 264330134259  
Option 1 ID : 264330526031  
Option 2 ID : 264330526033  
Option 3 ID : 264330526032  
Option 4 ID : 264330526034  
Status : Answered  
Chosen Option : 3

Q.29 Ajita Srivastava is a famous folk singer from \_\_\_\_\_ and she received the Padma Shri in 2022.

- Ans  1. Maharashtra  
 2. Gujarat  
 3. Madhya Pradesh  
 4. Uttar Pradesh

Question ID : 264330111960  
Option 1 ID : 264330439927  
Option 2 ID : 264330439928  
Option 3 ID : 264330439925  
Option 4 ID : 264330439926  
Status : Not Answered  
Chosen Option : --

Q.30 The Katakhal, Jiri, Chiri, Modhura, Longai, Sonai, Rukni and Singla are the main tributaries of which river?

- Ans  1. Chambal  
 2. Barak  
 3. Damodar  
 4. Ghaghra

Question ID : 264330113523  
Option 1 ID : 264330446179  
Option 2 ID : 264330446177  
Option 3 ID : 264330446178  
Option 4 ID : 264330446180  
Status : Not Answered  
Chosen Option : --



Q.31 In India, which mode of transport provide door to door services?

- Ans  1. Waterways  
 2. Road transport  
 3. Railways  
 4. Airways

Question ID : 264330119885  
Option 1 ID : 264330469816  
Option 2 ID : 264330469818  
Option 3 ID : 264330469815  
Option 4 ID : 264330469817  
Status : Not Answered  
Chosen Option : --

Q.32 A novel based on the story of a family named 'Fasting, Feasting' was written by whom among the following?

- Ans  1. Anita Desai  
 2. Arundhati Roy  
 3. Arvind Adiga  
 4. Kiran Desai

Question ID : 26433064228  
Option 1 ID : 264330251507  
Option 2 ID : 264330251504  
Option 3 ID : 264330251506  
Option 4 ID : 264330251505  
Status : Answered  
Chosen Option : 3

Q.33 Pradhan Mantri Awas Yojana–Urban (PMAY-U) was launched in the year \_\_\_\_\_ by the Government of India.

- Ans  1. 2021  
 2. 2015  
 3. 2017  
 4. 2019

Question ID : 264330120480  
Option 1 ID : 264330472174  
Option 2 ID : 264330472171  
Option 3 ID : 264330472172  
Option 4 ID : 264330472173  
Status : Answered  
Chosen Option : 4

Q.34 Which of the following Articles of the Indian Constitution is related with provision for just and humane conditions of work and maternity relief?

- Ans  1. Article 42  
 2. Article 45  
 3. Article 44  
 4. Article 43

Question ID : 264330180058  
Option 1 ID : 264330706215  
Option 2 ID : 264330706218  
Option 3 ID : 264330706217  
Option 4 ID : 264330706216  
Status : Answered  
Chosen Option : 4

**Q.35 Article 39A of the Constitution of India gives the idea of:**

- Ans  1. right to work, to education and to public assistance in certain cases  
 2. provisions for just and humane conditions of work  
 3. living wage, etc., for workers  
 4. equal justice and free legal aid

Question ID : 264330110802  
Option 1 ID : 264330435487  
Option 2 ID : 264330435485  
Option 3 ID : 264330435488  
Option 4 ID : 264330435486  
Status : Answered  
Chosen Option : 4

**Q.36 Who is the Head of the Secretariat of each house of the Parliament?**

- Ans  1. Speaker  
 2. Secretary General  
 3. President  
 4. Deputy Speaker

Question ID : 264330173533  
Option 1 ID : 264330680611  
Option 2 ID : 264330680612  
Option 3 ID : 264330680614  
Option 4 ID : 264330680613  
Status : Answered  
Chosen Option : 3

**Q.37 According to the census of India 2011, which group of states from the following recorded the highest population?**

- Ans  1. Maharashtra and Bihar  
 2. Tamil Nadu and Karnataka  
 3. West Bengal and Madhya Pradesh  
 4. Bihar and West Bengal

Question ID : 264330167028  
Option 1 ID : 264330655116  
Option 2 ID : 264330655118  
Option 3 ID : 264330655115  
Option 4 ID : 264330655117  
Status : Answered  
Chosen Option : 1

**Q.38 Which of the following dances of South India is known as peacock dance?**

- Ans  1. Garadi  
 2. Padayani  
 3. Mayilattam  
 4. Kummi

Question ID : 264330110423  
Option 1 ID : 264330433972  
Option 2 ID : 264330433969  
Option 3 ID : 264330433970  
Option 4 ID : 264330433971  
Status : Not Answered  
Chosen Option : --

**Q.39 Which of the following statements about Indian river systems is correct?**

- Ans  1. The Mahanadi river flows through the state of Chhattisgarh only.
2. Godavari river flows through Haryana state.
3. Yamuna River is a tributary of Ganga River.
4. Sone River originates in Punjab.

Question ID : 264330174350  
Option 1 ID : 264330683819  
Option 2 ID : 264330683821  
Option 3 ID : 264330683822  
Option 4 ID : 264330683820  
Status : Answered  
Chosen Option : 1

**Q.40 Which of the following statements is true with regard to preference given in most Five-Year Plans in India?**

- Ans  1. Extensive Promotion of private sector entrepreneurship
2. Control of prices
3. Regulation of financial sector
4. Investment in basic and heavy industries

Question ID : 264330113540  
Option 1 ID : 264330446246  
Option 2 ID : 264330446247  
Option 3 ID : 264330446248  
Option 4 ID : 264330446245  
Status : Answered  
Chosen Option : 4

**Q.41 When was Singer and Nicolson's fluid mosaic model accepted as the foundational model for the interpretation of existing data on membrane proteins and lipids, and their dynamics?**

- Ans  1. 1952
2. 1972
3. 1942
4. 1982

Question ID : 264330141717  
Option 1 ID : 264330555188  
Option 2 ID : 264330555187  
Option 3 ID : 264330555190  
Option 4 ID : 264330555189  
Status : Answered  
Chosen Option : 1

**Q.42 How many temples and monasteries are there in Ellora caves?**

- Ans  1. 18
2. 29
3. 34
4. 23

Question ID : 264330106253  
Option 1 ID : 264330417314  
Option 2 ID : 264330417313  
Option 3 ID : 264330417316  
Option 4 ID : 264330417315  
Status : Answered  
Chosen Option : 1

**Q.43** Which of the following gave the British Indian government enormous powers to repress political activities, and allowed the detention of political prisoners without trial for two years?

- Ans
- 1. Indian Slavery Act
  - 2. Rowlatt Act
  - 3. Indian Contract Act
  - 4. Negotiable Instruments Act

Question ID : 264330119489  
Option 1 ID : 264330468240  
Option 2 ID : 264330468242  
Option 3 ID : 264330468241  
Option 4 ID : 264330468239  
Status : Answered  
Chosen Option : 2

**Q.44** Autotrophs can fix \_\_\_\_\_.

- Ans
- 1. carbon dioxides
  - 2. carbon monoxide
  - 3. methane
  - 4. oxygen

Question ID : 264330120070  
Option 1 ID : 264330470537  
Option 2 ID : 264330470536  
Option 3 ID : 264330470538  
Option 4 ID : 264330470535  
Status : Not Answered  
Chosen Option : --

**Q.45** Who among the following was the first President of the Indian Olympic Association (IOA)?

- Ans
- 1. Sir Dorabji Tata
  - 2. Dr. AG Noehren
  - 3. Raja Bhalender Singh
  - 4. Maharaja Bhupinder Singh

Question ID : 264330118442  
Option 1 ID : 264330465171  
Option 2 ID : 264330465169  
Option 3 ID : 264330465172  
Option 4 ID : 264330465170  
Status : Not Answered  
Chosen Option : --

Q.46 Ram Sahay Panday got Padma Shri for promoting the dance form Raai from Bundelkhand region. Which State does this dance form belong to?

- Ans
- 1. Rajasthan
  - 2. Madhya Pradesh
  - 3. Bihar
  - 4. Chhattisgarh

Question ID : 2643308666  
Option 1 ID : 264330340308  
Option 2 ID : 264330340305  
Option 3 ID : 264330340307  
Option 4 ID : 264330340306  
Status : Answered  
Chosen Option : 2

Q.47 Reserve Bank of India (RBI) was established on:

- Ans
- 1. 1 April 1945
  - 2. 1 April 1925
  - 3. 1 April 1955
  - 4. 1 April 1935

Question ID : 264330110162  
Option 1 ID : 264330432927  
Option 2 ID : 264330432925  
Option 3 ID : 264330432928  
Option 4 ID : 264330432926  
Status : Answered  
Chosen Option : 4

Q.48 निम्नलिखित में से किसने मध्य भारत में चमड़ा श्रमिकों की बेहतरी के लिए सतनामी आंदोलन शुरू किया था?

- Ans
- 1. बी.आर. अंबेडकर
  - 2. महात्मा गांधी
  - 3. गुरु घासीदास
  - 4. स्वामी विवेकानंद

Question ID : 264330119024  
Option 1 ID : 264330466751  
Option 2 ID : 264330466752  
Option 3 ID : 264330466754  
Option 4 ID : 264330466753  
Status : Answered  
Chosen Option : 3

Q.49 In a volleyball game, 'libero' is a \_\_\_\_\_.

- Ans
- 1. specialised defensive player
  - 2. blocking expert
  - 3. specialised attacking player
  - 4. smashing expert

Question ID : 264330118484  
Option 1 ID : 264330465337  
Option 2 ID : 264330465339  
Option 3 ID : 264330465340  
Option 4 ID : 264330465338  
Status : Not Answered  
Chosen Option : --

**Q.50** The parliamentary system of the Government in India is based on the pattern of which of the following Parliamentary Governments?

- Ans
- 1. Russian
  - 2. Canadian
  - 3. USA
  - 4. British

Question ID : 264330173469  
 Option 1 ID : 264330680357  
 Option 2 ID : 264330680356  
 Option 3 ID : 264330680355  
 Option 4 ID : 264330680358  
 Status : Not Answered  
 Chosen Option : --

Section : Reasoning

**Q.1** Which figure should replace the question mark (?) if the series were to be continued?

O 8	8 =	X O	O A	
= A	O ▽	A 8	X ▽	?
X ▽	A X	= ▽	8 =	

Ans

- 1. 

= 8
▽ X
A O
- 2. 

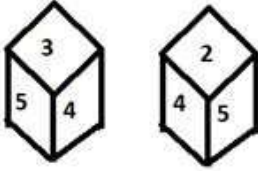
= 8
O A
▽ X
- 3. 

= X
8 O
A ▽
- 4. 

= 8
X O
A ▽

Question ID : 264330130801  
 Option 1 ID : 264330512317  
 Option 2 ID : 264330512316  
 Option 3 ID : 264330512315  
 Option 4 ID : 264330512318  
 Status : Answered  
 Chosen Option : 2

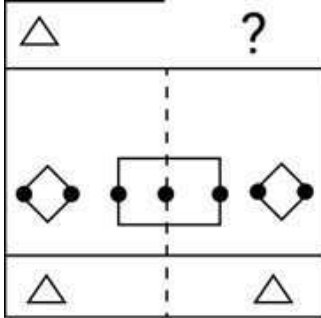
Q.2 Six numbers 1, 2, 3, 4, 5 and 6 are written on different faces of a dice. Two positions of this dice are shown in the figure. Find the number on the face opposite to 2.



- Ans  1. 3  
 2. 4  
 3. 1  
 4. 6

Question ID : 264330117893  
 Option 1 ID : 264330463389  
 Option 2 ID : 264330463388  
 Option 3 ID : 264330463387  
 Option 4 ID : 264330463390  
 Status : Answered  
 Chosen Option : 3

Q.3 Select the figure from the given options that will replace the question mark (?) in the figure given below to complete the pattern.



- Ans  1.   
 2.   
 3.   
 4.

Question ID : 264330116613  
 Option 1 ID : 264330458540  
 Option 2 ID : 264330458537  
 Option 3 ID : 264330458539  
 Option 4 ID : 264330458538  
 Status : Answered  
 Chosen Option : 2

Q.4 Which two signs should be interchanged to make the given equation correct?  
 $156 \div 12 - 4 \times 65 + 87 = 74$

- Ans
- 1. + and -
  - 2. = and  $\times$
  - 3.  $\times$  and -
  - 4. + and =

Question ID : 26433090221  
Option 1 ID : 264330354361  
Option 2 ID : 264330354364  
Option 3 ID : 264330354362  
Option 4 ID : 264330354363  
Status : Answered  
Chosen Option : 3

Q.5 छह दोस्त - A, B, C, D, E और F - एक वृत्ताकार मेज के परितः मेज के केंद्र की ओर मुख करके बैठे थे। वे एक दूसरे से समान दूरी पर बैठे थे। A, B के दाएं तीसरे स्थान पर बैठा था। E, D के ठीक बाएं बैठा था। A, F और D के ठीक बीच में बैठा था। निम्नलिखित में से कौन D के बाएं तीसरे स्थान पर बैठा था?

- Ans
- 1. C
  - 2. E
  - 3. A
  - 4. F

Question ID : 26433087005  
Option 1 ID : 264330341661  
Option 2 ID : 264330341663  
Option 3 ID : 264330341664  
Option 4 ID : 264330341662  
Status : Answered  
Chosen Option : 1

Q.6 Select the set in which the numbers are related in the same way as are the numbers of the following sets.

(NOTE : Operations should be performed on the whole numbers, without breaking down the numbers into its constituent digits. E.g. 13 – Operations on 13 such as adding/deleting/multiplying etc. to 13 can be performed. Breaking down 13 into 1 and 3 and then performing mathematical operations on 1 and 3 is NOT allowed)  
(39, 130, 13)  
(45, 150, 15)

- Ans
- 1. (39, 120, 17)
  - 2. (25, 60, 12)
  - 3. (35, 125, 10)
  - 4. (40, 75, 15)

Question ID : 26433097437  
Option 1 ID : 264330382439  
Option 2 ID : 264330382437  
Option 3 ID : 264330382440  
Option 4 ID : 264330382438  
Status : Not Answered  
Chosen Option : --



Q.7 Which of the following terms will replace the question mark (?) in the given series?  
MAF, PCG, SEH, ?, YIJ

- Ans
- 1. UFI
  - 2. RHI
  - 3. WHI
  - 4. VGI

Question ID : 264330102169  
 Option 1 ID : 264330401143  
 Option 2 ID : 264330401141  
 Option 3 ID : 264330401144  
 Option 4 ID : 264330401142  
 Status : Answered  
 Chosen Option : 4

Q.8 Which figure should replace the question mark (?) in the following series to continue the pattern?

D	Z	V	□	D	V	V	□	D	=	V	D	?
=				Z			Z			□		
□				=			=			Z		

Ans

- 1. 

D	Z	=
	V	
	□	
- 2. 

D	=	V
	□	
	Z	
- 3. 

D	=	V
	Z	
	□	
- 4. 

=	Z	D
	V	
	□	

Question ID : 264330129629  
 Option 1 ID : 264330507883  
 Option 2 ID : 264330507882  
 Option 3 ID : 264330507885  
 Option 4 ID : 264330507884  
 Status : Answered  
 Chosen Option : 2

Q.9 In a certain code language, 'WAR' is written as '39' and 'ZIP' is written as '30'. How will 'YES' be written in that language?

- Ans  1. 36  
 2. 34  
 3. 32  
 4. 37

Question ID : 26433089410

Option 1 ID : 264330351143

Option 2 ID : 264330351142

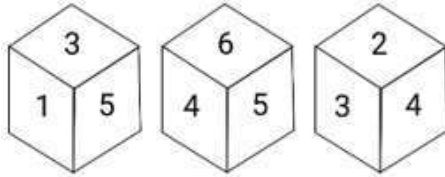
Option 3 ID : 264330351141

Option 4 ID : 264330351144

Status : Answered

Chosen Option : 3

Q.10 Three different positions of the same dice are shown. Find the number on the face opposite to the face showing '4'.



- Ans  1. 2  
 2. 5  
 3. 6  
 4. 1

Question ID : 264330112034

Option 1 ID : 264330440223

Option 2 ID : 264330440221

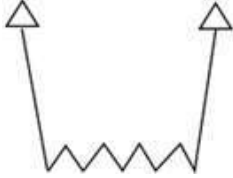
Option 3 ID : 264330440222

Option 4 ID : 264330440224

Status : Answered

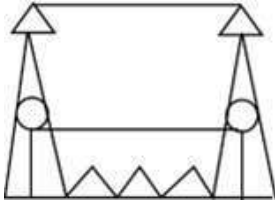
Chosen Option : 4

Q.11 Select the option in which the given figure is embedded (rotation is NOT allowed).

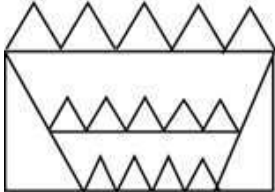


Ans

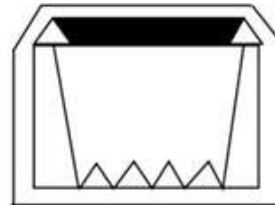
1.



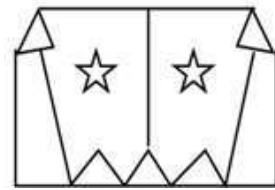
2.



3.



4.



Question ID : 264330111676

Option 1 ID : 264330438792

Option 2 ID : 264330438790

Option 3 ID : 264330438791

Option 4 ID : 264330438789

Status : Answered

Chosen Option : 3

Q.12 Read the given statements and conclusions carefully. Assuming that the information given in the statements is true, even if it appears to be at variance with commonly known facts, decide which of the given conclusions logically follow(s) from the statements.

Statements:

Some shoes are shirts.

All shirts are jackets.

Conclusions:

I. Some shoes are jackets.

II. All jackets are shoes.

Ans  1. Only conclusion II follows

2. Only conclusion I follows

3. Neither conclusion I nor II follows

4. Both conclusions I and II follow

Question ID : 26433068293

Option 1 ID : 264330267685

Option 2 ID : 264330267684

Option 3 ID : 264330267687

Option 4 ID : 264330267686

Status : Answered

Chosen Option : 2

Q.13 Select the option that is related to the fourth number in the same way as the first number is related to the second number and the fifth number is related to the sixth number.

17 : 69 :: ? : 109 :: 21 : 85

- Ans  1. 40  
 2. 27  
 3. 37  
 4. 31

Question ID : 26433052023  
Option 1 ID : 264330203397  
Option 2 ID : 264330203394  
Option 3 ID : 264330203396  
Option 4 ID : 264330203395  
Status : Answered  
Chosen Option : 2

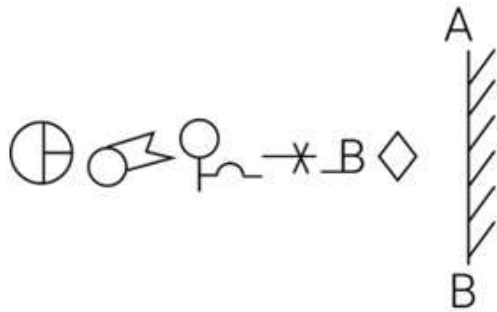
Q.14 How many triangles are there in the given figure?



- Ans  1. 30  
 2. 28  
 3. 24  
 4. 32

Question ID : 26433080664  
Option 1 ID : 264330316591  
Option 2 ID : 264330316590  
Option 3 ID : 264330316592  
Option 4 ID : 264330316589  
Status : Answered  
Chosen Option : 1

Q.15 Select the correct mirror image of the given figure when the mirror is placed at 'AB' as shown.



Ans

- ✗ 1.
- ✗ 2.
- ✓ 3.
- ✗ 4.

Question ID : 264330114698

Option 1 ID : 264330450880

Option 2 ID : 264330450877

Option 3 ID : 264330450879

Option 4 ID : 264330450878

Status : Answered

Chosen Option : 3

Q.16 Three different positions of the same dice are shown, the faces of which are marked with the letters A, B, C, D, E and F. Select the letter that will be on the face opposite to the face having the letter 'D'.



- Ans
- ✗ 1. F
  - ✗ 2. A
  - ✗ 3. C
  - ✓ 4. B

Question ID : 264330117422

Option 1 ID : 264330461732

Option 2 ID : 264330461729

Option 3 ID : 264330461731

Option 4 ID : 264330461730

Status : Answered

Chosen Option : 1

**Q.17** Select the option that is related to the fifth letter cluster in the same way as the second letter cluster is related to the first letter cluster and the fourth letter cluster is related to the third letter cluster.

YDVJ : PHMN :: FJBE : WNSI :: PXYS : ?

- Ans
- 1. PLEX
  - 2. GMNA
  - 3. JFBT
  - 4. GBPW

Question ID : 26433074692

Option 1 ID : 264330292856

Option 2 ID : 264330292859

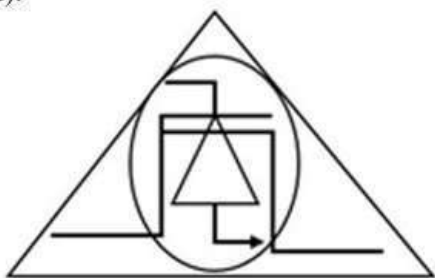
Option 3 ID : 264330292857

Option 4 ID : 264330292858

Status : Answered

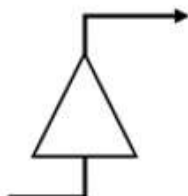
Chosen Option : 4

Q.18 Select the option that is embedded in the given figure (rotation is NOT allowed).

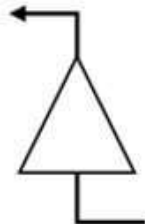


Ans

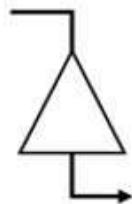
✗ 1.



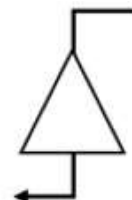
✗ 2.



✓ 3.



✗ 4.



Question ID : 26433082892

Option 1 ID : 264330325402

Option 2 ID : 264330325404

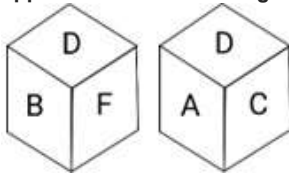
Option 3 ID : 264330325401

Option 4 ID : 264330325403

Status : Answered

Chosen Option : 3

Q.19 Six letters A, B, C, D, E and F are written on different faces of a dice. Two different positions of this dice are shown in the figure. Select the letter that will be on the face opposite to the one having E.



- Ans  1. D  
 2. C  
 3. F  
 4. A

Question ID : 264330121788  
Option 1 ID : 264330477323  
Option 2 ID : 264330477325  
Option 3 ID : 264330477326  
Option 4 ID : 264330477324  
Status : Answered  
Chosen Option : 1

Q.20 Select the number from the given options that can replace the question mark (?) in the following series.  
40, 50, 30, 60, 20, ?

- Ans  1. 40  
 2. 70  
 3. 50  
 4. 80

Question ID : 264330106384  
Option 1 ID : 264330417840  
Option 2 ID : 264330417838  
Option 3 ID : 264330417839  
Option 4 ID : 264330417837  
Status : Answered  
Chosen Option : 2



Q.21 Which figure should replace the question mark (?) if the following series were to be continued?

L O T R	R T = E	S R T =	= T E A	4 = T E	?
=	O	E	R	A	
M A D E	L D A M	O L D A	S D L O	R S D L	

Ans

✗ 1.

R T A 4
=
L D S E

✓ 2.

E T A L
=
4 D S R

✗ 3.

E T A 4
=
L R S D

✗ 4.

L 4 = T
E
A R S D

Question ID : 264330103895

Option 1 ID : 264330407882

Option 2 ID : 264330407884

Option 3 ID : 264330407883

Option 4 ID : 264330407881

Status : Answered

Chosen Option : 2

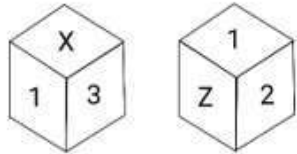
**Q.22** Select the correct mirror image of the given figure when the mirror is placed at PQ as shown below.



- Ans
- 1.
  - 2.
  - 3.
  - 4.

Question ID : 26433080771  
 Option 1 ID : 264330317017  
 Option 2 ID : 264330317018  
 Option 3 ID : 264330317020  
 Option 4 ID : 264330317019  
 Status : Answered  
 Chosen Option : 4

**Q.23** Three numbers, 1, 2 and 3, and three letters, X, Y and Z, are written on the different faces of a dice. Two positions of this dice are shown in the given figure. Find the letter/number on the face opposite to Y.



- Ans
- 1. X
  - 2. Z
  - 3. 3
  - 4. 1

Question ID : 264330116608  
 Option 1 ID : 264330458520  
 Option 2 ID : 264330458519  
 Option 3 ID : 264330458518  
 Option 4 ID : 264330458517  
 Status : Answered  
 Chosen Option : 4

**Q.24** Select the correct mirror image of the given figure when the mirror is placed at PQ as shown below.

//\|||=+&%((()\$))

P  
|  
Q

Ans

✗ 1. ((?)()\o\°&+==//||\|

✗ 2. ((?)((\o\°&+==||/\|

✓ 3. ((?)()\o\°&+==||/\|

✗ 4. ((?)()\o\°&+==||//\|

Question ID : 26433082028

Option 1 ID : 264330321947

Option 2 ID : 264330321945

Option 3 ID : 264330321946

Option 4 ID : 264330321948

Status : Answered

Chosen Option : 3

**Q.25** Select the correct combination of mathematical signs that can sequentially replace the \* signs and balance the given expression.

13 \* 7 \* 32 \* 56 \* 4 \* 73

Ans ✗ 1. +, x, -, ÷, =

✓ 2. x, -, +, ÷, =

✗ 3. -, +, +, x, =

✗ 4. -, x, +, ÷, =

Question ID : 26433074788

Option 1 ID : 264330293242

Option 2 ID : 264330293240

Option 3 ID : 264330293241

Option 4 ID : 264330293243

Status : Answered

Chosen Option : 2

Q.1

What is the value of  $\frac{0.061 \times 0.061 \times 0.061 + 0.031 \times 0.031 \times 0.031}{0.061 \times 0.061 - 0.061 \times 0.031 + 0.031 \times 0.031}$ ?

- Ans  1. 0.092  
 2. 0.0081  
 3. 0.27  
 4. 1.8

Question ID : 264330104342  
Option 1 ID : 264330409669  
Option 2 ID : 264330409670  
Option 3 ID : 264330409671  
Option 4 ID : 264330409672  
Status : Answered  
Chosen Option : 1

Q.2 A, B and C can complete a piece of work in 8, 10 and 12 days, respectively. In how many days would all of them complete the same work, working together?

- Ans  1.  $\frac{123}{37}$  days  
 2.  $\frac{120}{37}$  days  
 3.  $\frac{130}{37}$  days  
 4.  $\frac{128}{37}$  days

Question ID : 264330103628  
Option 1 ID : 264330406819  
Option 2 ID : 264330406820  
Option 3 ID : 264330406817  
Option 4 ID : 264330406818  
Status : Not Answered  
Chosen Option : --

Q.3 A solid copper sphere of diameter 30 cm is drawn into a wire of diameter 10 cm. Find the length of the wire (in cm).

- Ans  1. 180  
 2. 120  
 3. 240  
 4. 300

Question ID : 264330112445  
Option 1 ID : 264330441868  
Option 2 ID : 264330441865  
Option 3 ID : 264330441866  
Option 4 ID : 264330441867  
Status : Answered  
Chosen Option : 4

Q.4 If 45% of Ram's money is added to 50% of Soham's money, then the total amount will be 86% of Soham's money. What percentage of Ram's money did Soham have?

- Ans
- 1. 137%
  - 2. 85%
  - 3. 125%
  - 4. 95%

Question ID : 264330131332  
Option 1 ID : 264330514442  
Option 2 ID : 264330514439  
Option 3 ID : 264330514440  
Option 4 ID : 264330514441  
Status : Not Answered  
Chosen Option : --

Q.5 What is the product of the 5<sup>th</sup> prime number and the prime number immediately greater than 100?

- Ans
- 1. 1067
  - 2. 1717
  - 3. 1111
  - 4. 1261

Question ID : 264330104345  
Option 1 ID : 264330409681  
Option 2 ID : 264330409684  
Option 3 ID : 264330409682  
Option 4 ID : 264330409683  
Status : Answered  
Chosen Option : 3

Q.6 A person borrows ₹5,000 for 2 years at 4% p.a. simple interest. He immediately lends it to another person at  $\frac{25}{4}$ % p.a. for 2 years. Find his gain (in ₹) in the transaction.

- Ans
- 1. 225
  - 2. 250
  - 3. 275
  - 4. 200

Question ID : 264330119421  
Option 1 ID : 264330467971  
Option 2 ID : 264330467972  
Option 3 ID : 264330467974  
Option 4 ID : 264330467973  
Status : Not Answered  
Chosen Option : --

Q.7 The initial population of a country is 1,87,500. If the birth and the death rates are 13% and 9%, respectively, then find the population of the country after 2 years.

- Ans
- 1. 2,02,700
  - 2. 2,02,900
  - 3. 2,03,000
  - 4. 2,02,800

Question ID : 264330106009  
Option 1 ID : 264330416337  
Option 2 ID : 264330416339  
Option 3 ID : 264330416340  
Option 4 ID : 264330416338  
Status : Not Answered  
Chosen Option : --

Q.8 A trip to a destination is made in the following way:  
a) 550 km by train at an average speed of 55 km/h  
b) 4500 km by plane at an average speed of 500 km/h  
c) 400 km by boat at an average speed of 25 km/h  
d) 55 km by auto at an average speed of 35 km/h  
What is the average speed for the entire journey?

- Ans
- 1. 3300 km/h
  - 2. 9600 km/h
  - 3.  $121\frac{64}{25}$  km/h
  - 4.  $150\frac{135}{256}$  km/h

Question ID : 264330118133  
Option 1 ID : 264330464350  
Option 2 ID : 264330464348  
Option 3 ID : 264330464349  
Option 4 ID : 264330464347  
Status : Not Answered  
Chosen Option : --

Q.9 If  $k$ ,  $(k^2 + 3)$  and  $(k^3 + 5)$  are prime numbers, then what will be the value of  $k$ ?

- Ans
- 1. 4
  - 2. 3
  - 3. 7
  - 4. 2

Question ID : 264330104277  
Option 1 ID : 264330409410  
Option 2 ID : 264330409411  
Option 3 ID : 264330409409  
Option 4 ID : 264330409412  
Status : Answered  
Chosen Option : 3

**Q.10** If the price of tea goes up by 28%, then by what percentage (correct to the nearest whole number) should its consumption be reduced so that the expenditure on it remains unchanged?

Ans  1. 22%

2. 27%

3. 21%

4. 28%

Question ID : 264330118051

Option 1 ID : 264330464019

Option 2 ID : 264330464021

Option 3 ID : 264330464022

Option 4 ID : 264330464020

Status : Not Answered

Chosen Option : --

**Q.11** What is the area of a triangle (in "cm<sup>2</sup>" ) having sides of length 24 cm, 17 cm and 9 cm?

Ans  1.  $40\sqrt{2}$

2.  $35\sqrt{2}$

3.  $20\sqrt{2}$

4.  $40\sqrt{3}$

Question ID : 264330126533

Option 1 ID : 264330495807

Option 2 ID : 264330495806

Option 3 ID : 264330495805

Option 4 ID : 264330495804

Status : Not Answered

Chosen Option : --

**Q.12** If marked price is 75% more than the cost price and a discount of 40% is allowed on the marked price, then percentage profit is:

Ans  1. 5%

2. 8%

3. 3%

4. 7%

Question ID : 264330126187

Option 1 ID : 264330494423

Option 2 ID : 264330494421

Option 3 ID : 264330494422

Option 4 ID : 264330494420

Status : Not Answered

Chosen Option : --

Q.13 Find the average of the first five composite numbers.

- Ans  1. 7.8  
 2. 6.8  
 3. 8.2  
 4. 7.4

Question ID : 264330131439  
Option 1 ID : 264330514861  
Option 2 ID : 264330514859  
Option 3 ID : 264330514862  
Option 4 ID : 264330514860  
Status : Not Answered  
Chosen Option : --

Q.14 A vertical pole of length 8.3 m casts a shadow of length 4.15 m. Find the height of the tree that casts a 40 m long shadow under similar conditions (in m).

- Ans  1. 60  
 2. 70  
 3. 100  
 4. 80

Question ID : 264330168549  
Option 1 ID : 264330661009  
Option 2 ID : 264330661008  
Option 3 ID : 264330661007  
Option 4 ID : 264330661010  
Status : Not Answered  
Chosen Option : --

Q.15 Arun bought 150 guavas for ₹525 and sold them at the rate of ₹36 per dozen. What is the profit or loss percentage of Arun (correct up to two decimal places)?

- Ans  1. 16.67% Loss  
 2. 14.29% Profit  
 3. 16.67% Profit  
 4. 14.29% Loss

Question ID : 264330103952  
Option 1 ID : 264330408112  
Option 2 ID : 264330408109  
Option 3 ID : 264330408111  
Option 4 ID : 264330408110  
Status : Not Answered  
Chosen Option : --



Q.1 Which of the following is the foundation of data communication on the web, enabling the transfer of web page content?

- Ans  1. Hypertext Transfer Protocol  
 2. Domain Name Server  
 3. World Wide Web  
 4. Uniform Resource Locator

Question ID : 264330180801  
Option 1 ID : 264330709167  
Option 2 ID : 264330709169  
Option 3 ID : 264330709168  
Option 4 ID : 264330709170  
Status : Answered  
Chosen Option : 1

Q.2 एमएस वर्ड 365 (MS Word 365) से संबंधित निम्न कथनों के आधार पर कौन-सा विकल्प सही है?

- 1) Ctrl + X का उपयोग डॉक्यूमेंट को कॉपी करने के लिए किया जाता है।  
2) Ctrl+V का उपयोग डॉक्यूमेंट को मूव करने के लिए किया जाता है।

- Ans  1. दोनों (1) और (2)  
 2. केवल (1)  
 3. न तो (1) और न ही (2)  
 4. केवल (2)

Question ID : 264330175969  
Option 1 ID : 264330690173  
Option 2 ID : 264330690171  
Option 3 ID : 264330690174  
Option 4 ID : 264330690172  
Status : Answered  
Chosen Option : 2

Q.3 Which of the following shortcut keys is used in MS Excel 365 to make the cell in edit mode, allowing you to make changes?

- Ans  1. Ctrl + F1  
 2. F1  
 3. F2  
 4. Ctrl + F2

Question ID : 264330180413  
Option 1 ID : 264330707622  
Option 2 ID : 264330707621  
Option 3 ID : 264330707620  
Option 4 ID : 264330707619  
Status : Answered  
Chosen Option : 4

Q.4 एमएस एक्सेल 365 (MS Excel 365) का निम्नलिखित में से कौन-सा फ़ंक्शन, प्रत्येक वैल्यू (value) के बीच एक स्पेस को छोड़ते हुए अनियमित स्पेस को हटाता है?

- Ans
- 1. AVERAGE
  - 2. SUM
  - 3. VLOOKUP
  - 4. TRIM

Question ID : 264330180405

Option 1 ID : 264330707589

Option 2 ID : 264330707587

Option 3 ID : 264330707590

Option 4 ID : 264330707588

Status : Not Answered

Chosen Option : --

Q.5 MS-Word 365 में निम्नलिखित में से किस विकल्प से आप चयनित टेक्स्ट के फ़ॉन्ट साइज़ को, फ़ॉन्ट साइज़ सूची में उपलब्ध अगले बड़े साइज़ में परिवर्तित कर सकते हैं?

- Ans
- 1. इटैलिक्स
  - 2. बोल्ड
  - 3. फ़ॉन्ट साइज़ बढ़ाएँ
  - 4. फ़ॉन्ट साइज़ कम करें

Question ID : 264330173354

Option 1 ID : 264330679898

Option 2 ID : 264330679897

Option 3 ID : 264330679895

Option 4 ID : 264330679896

Status : Answered

Chosen Option : 3

Q.6 In MS Excel 365, what is the term for the area that contains specific and formatted data in MS Excel for printing?

- Ans
- 1. View
  - 2. Print preview
  - 3. Print area
  - 4. Print margin

Question ID : 264330182119

Option 1 ID : 264330714315

Option 2 ID : 264330714317

Option 3 ID : 264330714318

Option 4 ID : 264330714316

Status : Answered

Chosen Option : 3

Q.7 In MS Word 365 What is the primary purpose of using bullets and numbering in document formatting?

- Ans
- 1. To indicate the importance of specific text.
  - 2. To organize information into lists or sequences.
  - 3. To adjust the margins and spacing of the document.
  - 4. To highlight text with a different font or colour.

Question ID : 264330173328  
Option 1 ID : 264330679791  
Option 2 ID : 264330679792  
Option 3 ID : 264330679794  
Option 4 ID : 264330679793  
Status : Answered  
Chosen Option : 3

Q.8 Which of the following is an example of a table style in Microsoft Word 365?

- Ans
- 1. Chicago Manual of Style
  - 2. Plain Grid
  - 3. MLA (Modern Language Association)
  - 4. APA (American Psychological Association)

Question ID : 264330174492  
Option 1 ID : 264330684389  
Option 2 ID : 264330684390  
Option 3 ID : 264330684387  
Option 4 ID : 264330684388  
Status : Not Answered  
Chosen Option : --

Q.9 निम्नलिखित में से कौन-सा, यूजर्स के बीच संदेशों के आदान-प्रदान के लिए एक कंप्यूटर-आधारित एप्लिकेशन है?

- Ans
- 1. ई-मेल (Email)
  - 2. क्रोम (chrome)
  - 3. बिंग (Bing)
  - 4. मोज़िला (Mozilla)

Question ID : 264330180792  
Option 1 ID : 264330709131  
Option 2 ID : 264330709132  
Option 3 ID : 264330709133  
Option 4 ID : 264330709134  
Status : Answered  
Chosen Option : 1

Q.10 नया खाली डॉक्यूमेंट बनाने का तरीका निम्नलिखित में से कौन-सा है?

- Ans
- 1. एमएस-एक्सेल
  - 2. एमएस आउटलुक
  - 3. एमएस-पावरप्वाइंट
  - 4. एमएस-वर्ड

Question ID : 264330178284  
Option 1 ID : 264330699191  
Option 2 ID : 264330699194  
Option 3 ID : 264330699193  
Option 4 ID : 264330699192  
Status : Not Answered  
Chosen Option : --

